



TOPIC: Measurement of Length

Notebook work

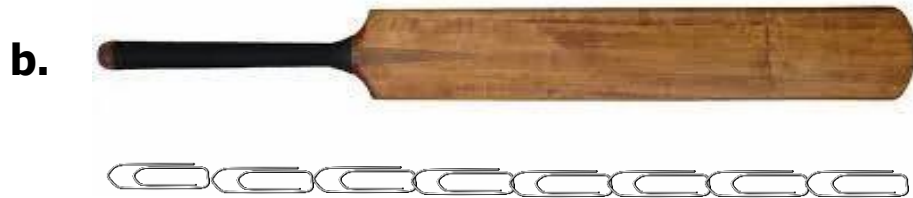
RESOURCE PERSON: Mrs. Sirisha

NAME: _____ CLASS: I SEC: ___ DATE: _____

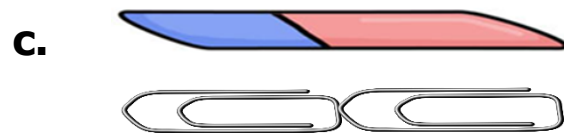
1. How long is each object?



The pencil is _____ clips long.



The cricket bat is _____ clips long.



The eraser is _____ clips long.

CHECKED BY: ACADEMIC COORDINATOR – CLASS - I
ISWK/DEPARTMENT OF MATHEMATICS - 2023-2024



TOPIC: Measurement of Weight

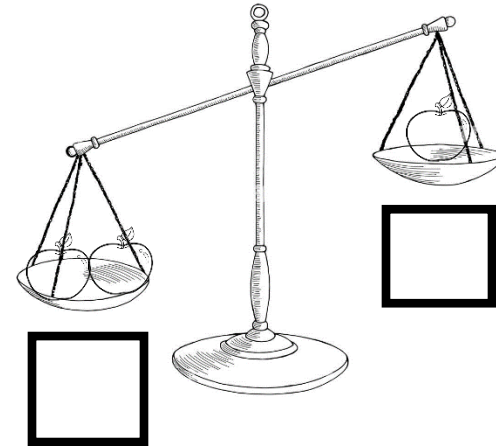
Worksheet - 1

RESOURCE PERSON: Mrs. Sirisha


NAME: _____ CLASS: I SEC: ___ DATE: _____

Write (H) for heavy and (L) for light objects.

a.



b.



CHECKED BY: ACADEMIC COORDINATOR – CLASS - I
ISWK/DEPARTMENT OF MATHEMATICS - 2023-2024

